





Adı :

Soyadı:

1 . Sınıf
Matematik

Geometrik Şekiller
Köşe-Kenar-4

Eşleştirelim, boyayalım.




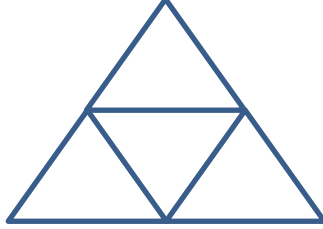

Adı :

Soyadı:

1 . Sınıf
Matematik

Geometrik Şekiller
Köşe-Kenar-4

Kaç tane var?



Kaç tane var? Say, yaz, boya.

